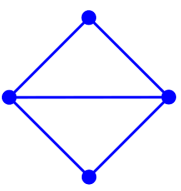
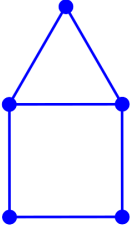
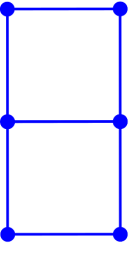
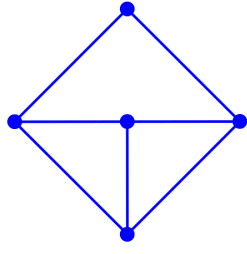


Riddle 13

A *dimer* is two copies of a given graph.

With each vertex in one copy joined to an analogue in the other copy by an extra edge.

Find the crossing numbers for the dimers built out of each of the following.

			
Di	Domicile	Domino	Tarantulahead